


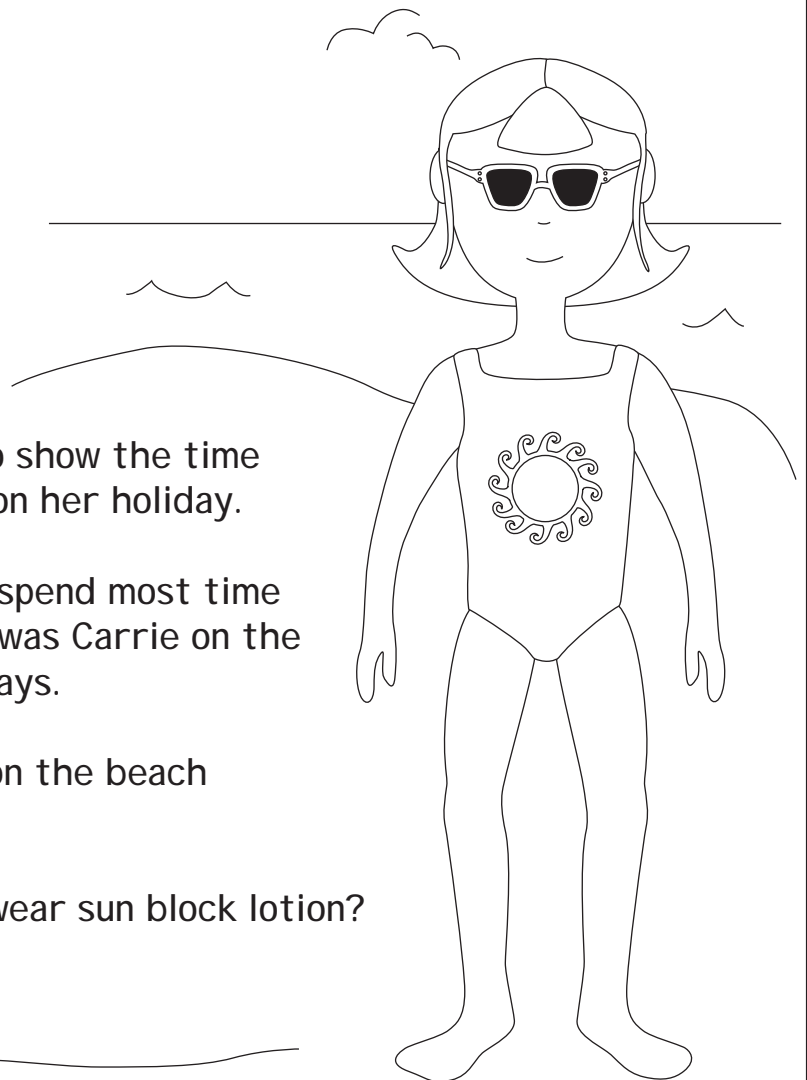

Carrie Copper at the Seaside



Carrie Copper went on holiday to Spain with her parents.

These figures are from her diary. They show how many hours Carrie spent on the beach during her 14 day holiday.

Day 1 Wednesday	0 hours
Day 2 Thursday	4 hours
Day 3 Friday	2 hours
Day 4 Saturday	5 hours
Day 5 Sunday	1 hour
Day 6 Monday	$\frac{1}{2}$ hour
Day 7 Tuesday	$2\frac{1}{2}$ hour
Day 8 Wednesday	2 hours
Day 9 Thursday	5 hours
Day 10 Friday	4 hours
Day 11 Saturday	$2\frac{1}{2}$ hours
Day 12 Sunday	3 hours
Day 13 Monday	0 hours
Day 14 Tuesday	$1\frac{1}{2}$ hours



Draw a bar chart or a pictogram to show the time Carrie Copper spent on the beach on her holiday.

In which three day period did she spend most time on the beach, and how many hours was Carrie on the beach altogether over the three days.

How many hours did Carrie spend on the beach altogether on her holiday?

On which days did Carrie need to wear sun block lotion?

